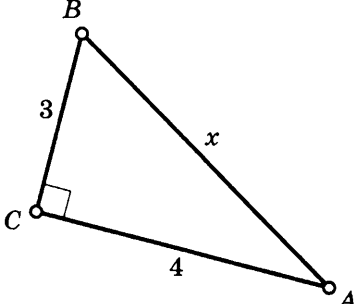
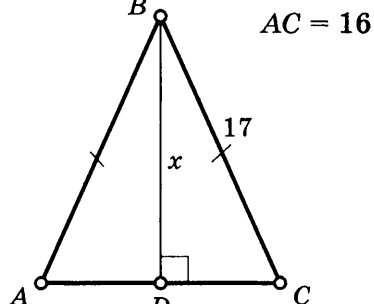
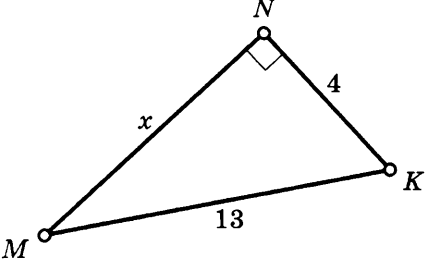
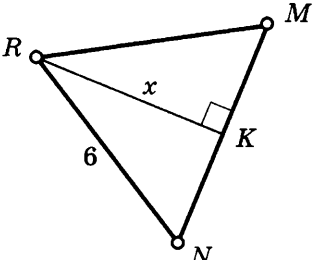
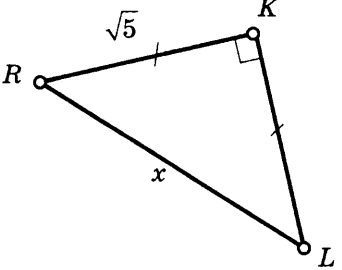
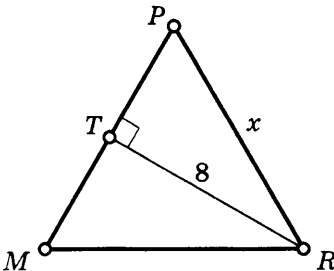
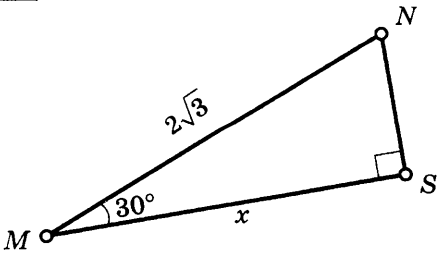
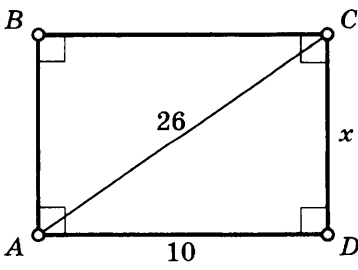


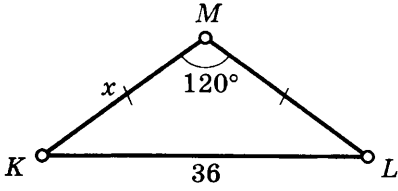
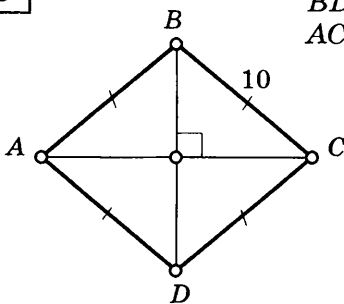
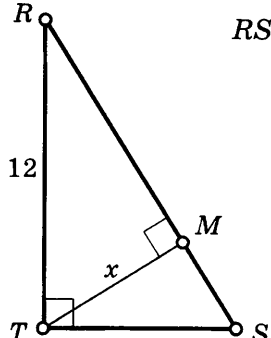
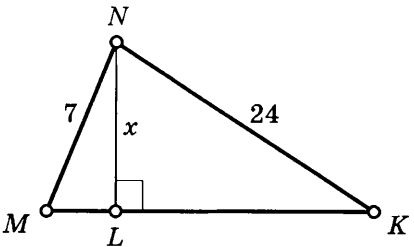
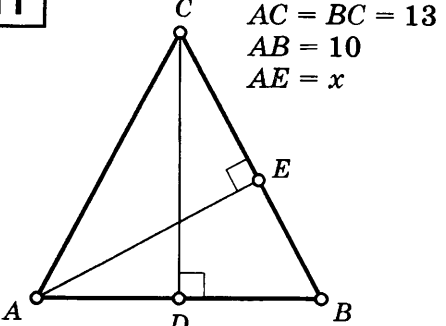
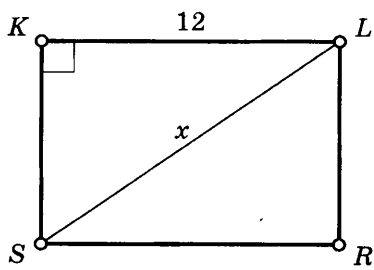
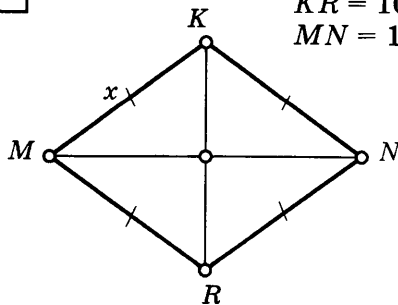
ТЕОРЕМА ПИФАГОРА

Таблица 12

Найдите x .

<p>1</p> 	<p>5</p> 
<p>2</p> 	<p>6</p> <p>$\triangle RMN$ — правильный</p> 
<p>3</p> 	<p>7</p> <p>$\triangle MPR$ — правильный</p> 
<p>4</p> 	<p>8</p> 

Продолжение табл. 12

<p>9</p> 	<p>13</p> <p>$BD = 12$ $AC = x$</p> 
<p>10</p> <p>$RS = 13$</p> 	<p>14</p> <p>$MK = 25$</p> 
<p>11</p> <p>$AC = BC = 13$ $AB = 10$ $AE = x$</p> 	<p>15</p> <p>$SRLK$ — прямоугольник</p> 
<p>12</p> <p>$KR = 10$ $MN = 12$</p> 	<p>16</p> <p>$MT = 34$ $MN = x$</p> 